

Name _____

Date _____

Chapter 3
Form B

1. Determine if the ordered pair $(-2, 1)$ is a solution of $2x - y = -3$.

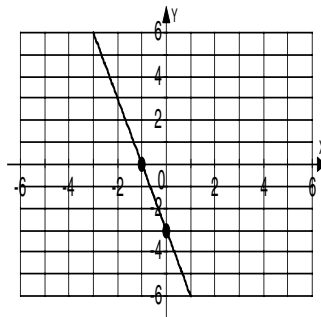
2. Complete the table of values for $y = \frac{1}{2}x + 4$.

3. Graph the equation $y = \frac{1}{2}x + 4$ using the ordered pairs from problem 2.

4. Graph $y = -x + 2$.

5. For the graph shown, identify the:

- (a) x -intercept
- (b) y -intercept.

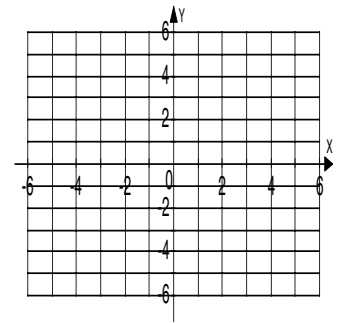


1. _____

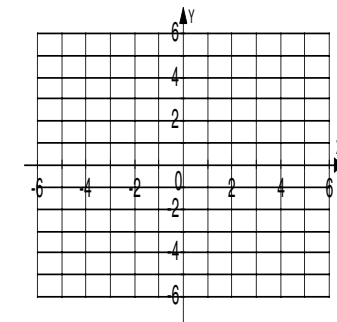
2.

x	$y = \frac{1}{2}x + 4$	(x, y)
-2		
0		
2		

3.



4.



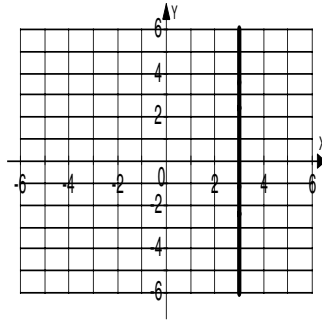
5a. _____

b. _____

Name _____

Date _____

6. For the graph shown, identify the:
(a) x -intercept
(b) y -intercept.

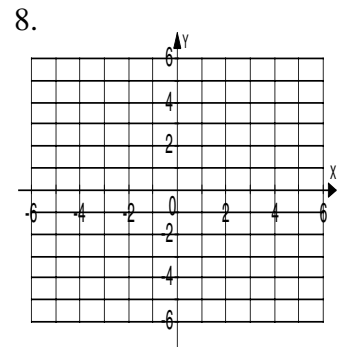


- 6a. _____
b. _____

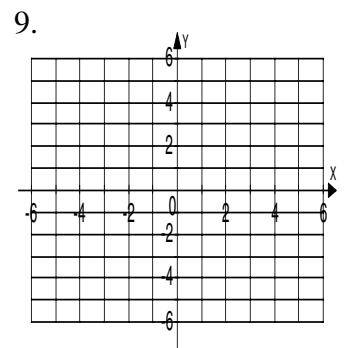
7. For the equation $2x + 4y = 8$, identify the:
(a) x -intercept
(b) y -intercept.

- 7a. _____
b. _____

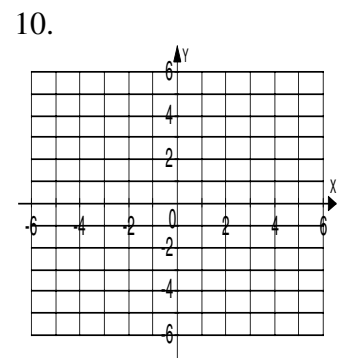
8. Graph the equation $4x + 2y = 8$ using the x and y - intercepts found in problem 7.



9. Graph the equation $2x - 3y = 6$.



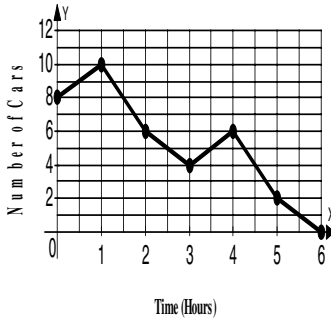
10. Graph the equation $y = 3$.



Name _____

Date _____

The following graph shows the number of cars, y , in a small parking lot x hours after noon.



Use the graph for problems 11 – 12.

11. (a) At what time were the maximum number of cars in the lot? 11a. _____
(b) What was the maximum number of cars? b. _____
12. (a) What is the x-intercept? 12a. _____
(b) In terms of time and number of cars, interpret the meaning of this intercept. b. _____

For problems 13 – 14, calculate the slope of the line passing through the given points.

13. $(7, -1)$ and $(-4, -2)$ 13. _____
14. $(-4, 3)$ and $(-4, 2)$ 14. _____
15. Determine whether the lines through each pair of points are parallel. Do not graph. 15. _____
 $(0, -1)$ and $(1, 2)$
 $(2, -1)$ and $(1, 1)$

Name _____

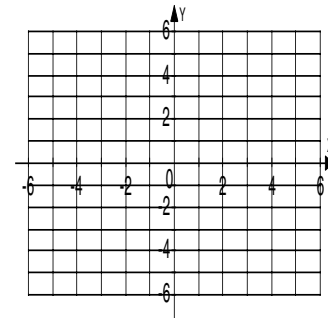
Date _____

16. For the equation $8x - 3y = 6$, find the
(a) slope
(b) y -intercept.

16a. _____
b. _____

17. Use the slope and y -intercept found in problem 16 and graph $8x - 3y = 6$.

17.



18. For the line with slope -2 and passing through $(1, -2)$ write the equation of the line in:
(a) point-slope form.
(b) slope-intercept form.

18a. _____
b. _____

19. The equation of a line is given as $y = -\frac{2}{3}x + 5$. Find the slope that is (a) parallel to the line with the given equation and (b) perpendicular to the line with the given equation.

19a. _____
b. _____

20. Find the equation of the line in (a) point-slope form and (b) slope-intercept form that passes through $(2, 5)$ and $(-8, -10)$.

20a. _____
b. _____